



**Section A**

Answer **all** questions in this section.

**1** In 2020 scientists confirmed the discovery of a new species of orangutan. The Tapanuli orangutan is found in a small area of rainforest on the Indonesian island Sumatra. The species is critically endangered. It is threatened by road construction, illegal forest clearance and a proposed hydroelectric dam.

**(a)** Describe the short-term and the long-term environmental impacts of a hydroelectric dam.

short-term .....

.....

.....

.....

long-term .....

.....

.....

.....

[4]

**(b)** Describe the economic impacts of a hydroelectric dam on the local and national population of Indonesia.

local .....

.....

.....

.....

national .....

.....

.....

.....

[4]

(c) Explain how the Evolutionarily Distinct and Globally Endangered (EDGE) programme can help conserve the Tapanuli orangutan.

.....  
.....  
.....  
..... [2]

(d) Outline **two** relevant strategies, other than the EDGE programme, for the conservation of the Tapanuli orangutan.

.....  
.....  
.....  
.....  
.....  
.....  
.....  
.....  
..... [4]

[Total: 14]

2 Fig. 2.1 shows the formation of dry and wet acid deposition.

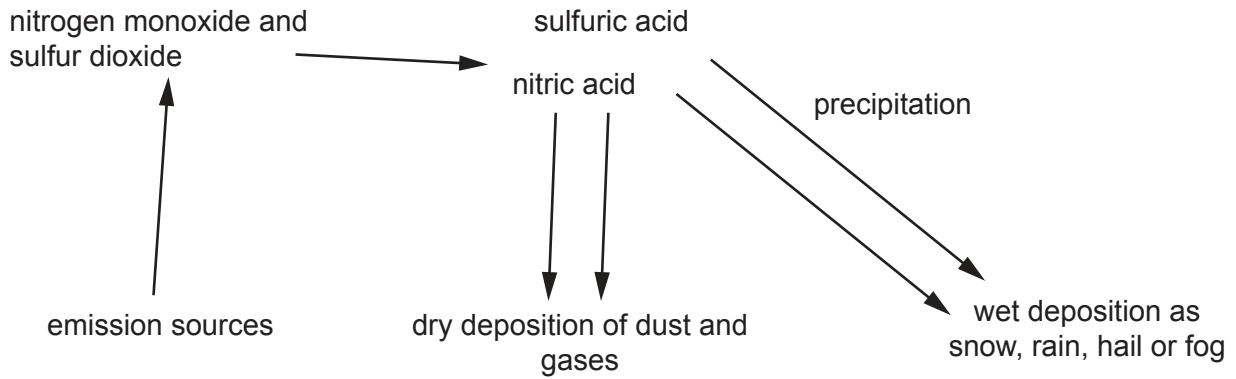


Fig. 2.1

(a) State **one** emission source that can lead to the acid deposition shown in Fig. 2.1.

.....  
..... [1]

(b) Outline the formation of wet acid deposition shown in Fig. 2.1.

.....  
.....  
.....  
..... [2]

(c) Outline the impact of acid deposition on vegetation and crops.

.....  
.....  
.....  
..... [2]

(d) Suggest **two** management strategies to reduce the formation of acid deposition.

.....  
.....  
.....  
..... [2]

[Total: 7]

- 3 (a) Fig. 3.1 shows data from a report on the number of undernourished people in the world in 2018.

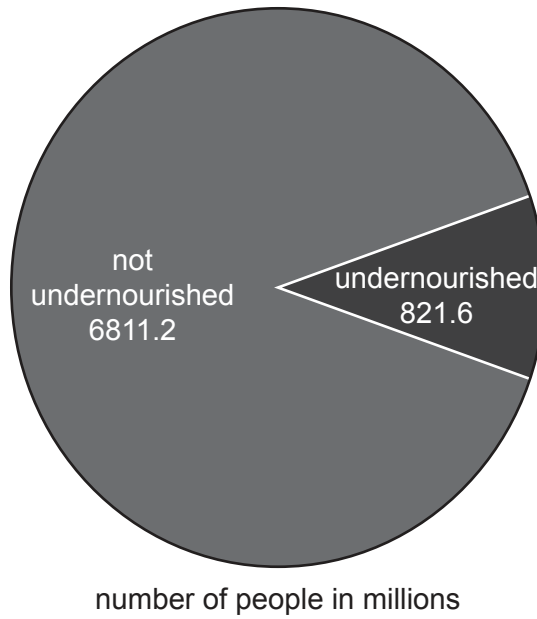


Fig. 3.1

- (i) Use Fig. 3.1 to calculate the percentage of the world's population who are undernourished.

..... [2]

- (ii) Food insecurity can cause undernourishment.

Define food security.

.....  
.....  
.....  
..... [2]

(iii) Explain **two** causes of food insecurity.

1 .....

.....

.....

.....

.....

2 .....

.....

.....

.....

[4]

(b) Africa Rising is a project which helps local people. It offers specific solutions and advice on sustainable agricultural methods. These solutions aim to improve household welfare.

It focuses on crops and livestock as well as the use of trees in agriculture, irrigation, soil conservation and nutrition.

The project works with women and men.

Explain how the Africa Rising project can improve food security.

.....

.....

.....

.....

.....

.....

.....

.....

[3]

[Total: 11]

4 Aquifers, artesian wells and boreholes are strategies for managing water security.

(a) Complete Table 4.1 by matching the strategies to the correct definition.

**aquifer                  artesian well                  borehole**

**Table 4.1**

definition	strategy
a deep narrow hole made in the ground to locate ground water	
a body of permeable rock which can contain or transmit ground water	
a deep hole through permeable rock which reaches ground water held under pressure	

[2]

(b) State **one** source of ground water.

.....  
 ..... [1]

(c) Describe how ground water stores can become polluted.

.....  
 .....  
 .....  
 ..... [2]

(d) Explain how the pollution of ground water stores can lead to water insecurity.

.....  
 .....  
 .....  
 .....  
 .....  
 ..... [3]

(e) Explain **one** strategy to manage water security.

.....  
 .....  
 .....  
 ..... [2]

[Total: 10]

**[Turn over**

5 (a) Fig. 5.1 shows a food web for the Southern Ocean.

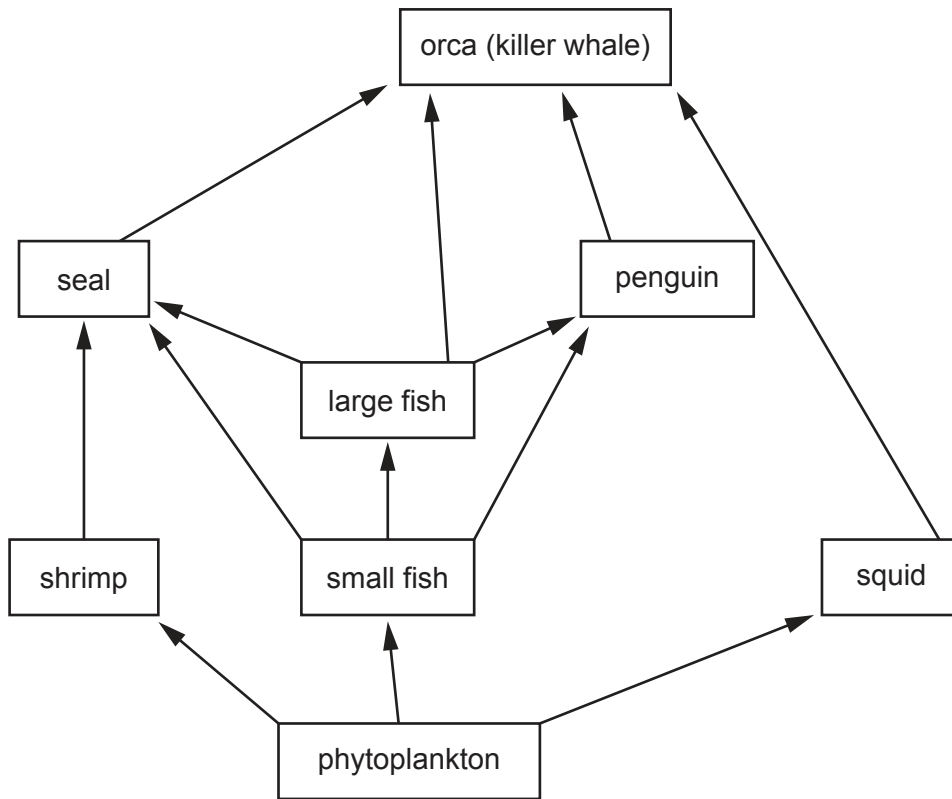


Fig. 5.1

- (i) State what the arrows in the food web shown in Fig. 5.1 represent.  
 ..... [1]
- (ii) State the trophic level of large fish.  
 ..... [1]
- (iii) State the trophic level with the least energy available.  
 ..... [1]
- (iv) Explain how energy is lost from a food web.  
 .....  
 .....  
 .....  
 ..... [2]



- (v) Explain the effects a decrease in the squid population would have on this Southern Ocean food web.

.....

.....

.....

.....

.....

.....

.....

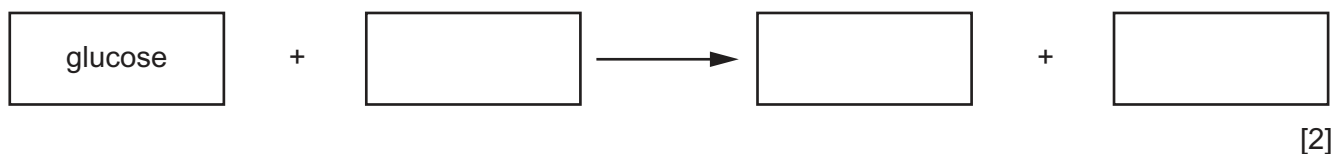
.....

.....

..... [4]

(b) Aerobic respiration is a process in which energy is released from glucose.

(i) Complete the word equation for aerobic respiration.



(ii) Fig. 5.2 shows a simplified diagram of the carbon cycle.

Use the following terms to complete the diagram in Fig. 5.2.

**photosynthesis**      **respiration**      **feeding**      **decomposition**      **combustion**

You may use each term more than once.

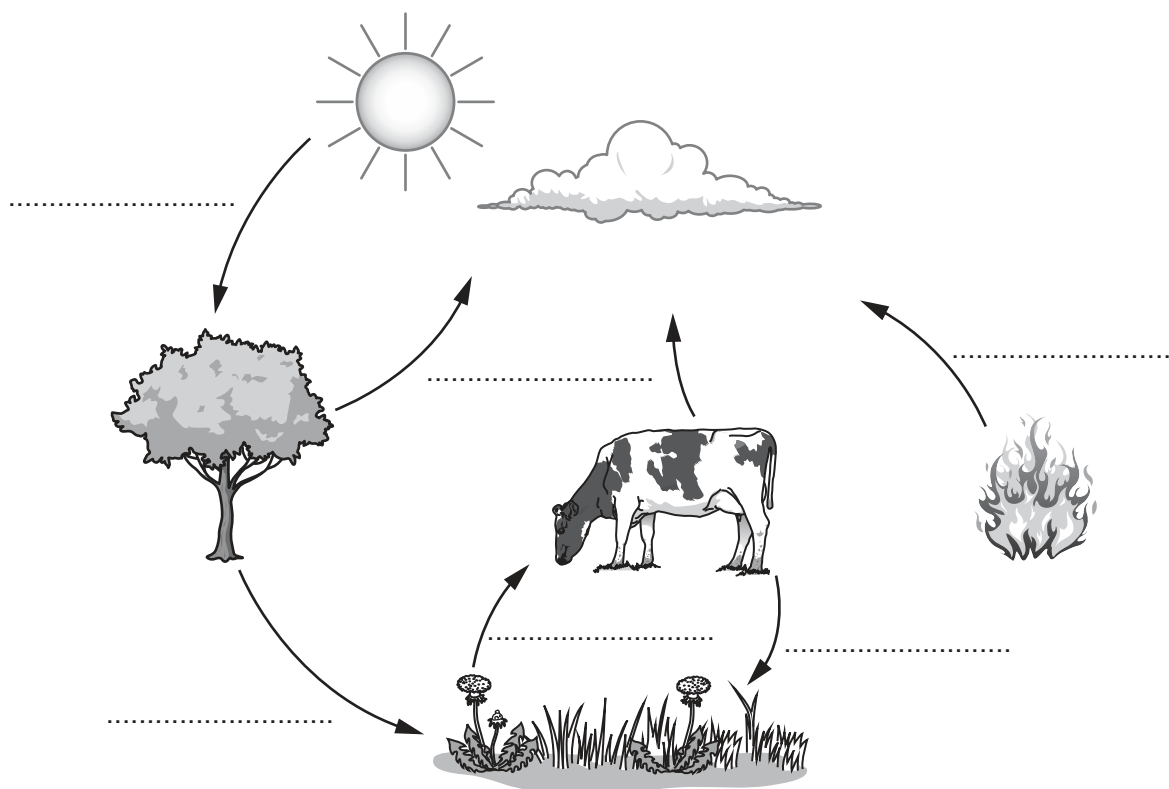


Fig. 5.2

[3]

(iii) Explain how the combustion of fossil fuels leads to climate change.

.....

.....

.....

.....

.....

.....

.....

.....

.....

.....

..... [4]

[Total: 18]



















**BLANK PAGE**

---

The boundaries and names shown, the designations used and the presentation of material on any maps contained in this question paper/insert do not imply official endorsement or acceptance by Cambridge Assessment International Education concerning the legal status of any country, territory, or area or any of its authorities, or of the delimitation of its frontiers or boundaries.

Permission to reproduce items where third-party owned material protected by copyright is included has been sought and cleared where possible. Every reasonable effort has been made by the publisher (UCLES) to trace copyright holders, but if any items requiring clearance have unwittingly been included, the publisher will be pleased to make amends at the earliest possible opportunity.

To avoid the issue of disclosure of answer-related information to candidates, all copyright acknowledgements are reproduced online in the Cambridge Assessment International Education Copyright Acknowledgements Booklet. This is produced for each series of examinations and is freely available to download at [www.cambridgeinternational.org](http://www.cambridgeinternational.org) after the live examination series.

Cambridge Assessment International Education is part of Cambridge Assessment. Cambridge Assessment is the brand name of the University of Cambridge Local Examinations Syndicate (UCLES), which is a department of the University of Cambridge.